



# December

Monday	Tuesday	Wednesday	Thursday
<p style="text-align: right;">2</p> <p>Write the numbers 1 to 50 in the chart.</p>	<p style="text-align: right;">3</p> <p>Look at each picture. Try to sound out each picture and write the letters you hear on the lines.</p>	<p style="text-align: right;">4</p> <p>Look at each set of squares. Circle the groups of 10 in each set. Count on from 10 to see how many squares there are. Write your answer.</p>	<p style="text-align: right;">5</p> <p>Figure out which word belongs in each set of boxes and write it correctly in the boxes.</p>
<p style="text-align: right;">9</p> <p>Read a book with your parents. Draw what happened first, in the middle and last in the story.</p>	<p style="text-align: right;">10</p> <p>Look at each numeral. Draw a set that is more than, less than or equal to each numeral.</p>	<p style="text-align: right;">11</p> <p>Color the face of each 3D solid shape. Write the shape of the face of each solid shape.</p>	<p style="text-align: right;">12</p> <p>Opinion writing: What is your favorite holiday and why?</p>
<p style="text-align: right;">16</p> <p>Circle the mistakes in each sentence. For a challenge, correct the sentences.</p>	<p style="text-align: right;">17</p> <p>Draw and label 1 need and 1 want.</p>	<p style="text-align: right;">18</p> <p>List how many sides and corners each 2D flat shape has. Color the two shapes that have the same number of sides and corners.</p>	<p style="text-align: right;">19</p> <p>Figure out which word belongs in each set of boxes and write it correctly in the boxes.</p>

Monday

Write the numbers 1 to 50 in the chart.

1									10
									50

Tuesday

Look at each picture. Try to sound out each picture and write the letters you hear on the lines.



\_\_\_\_\_ e




\_\_\_\_\_ e



\_\_\_\_\_ e



\_\_\_\_\_ e



\_\_\_\_\_ e



\_\_\_\_\_ e




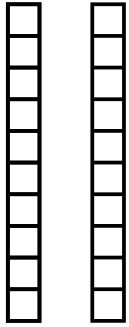
\_\_\_\_\_ e




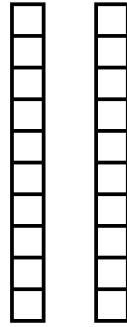
\_\_\_\_\_ e

Wednesday


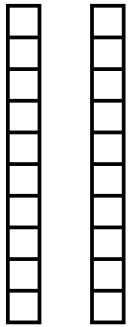
Look at each set of squares. Circle the groups of 10 in each set. Count on from 10 to see how many squares there are. Write your answer.



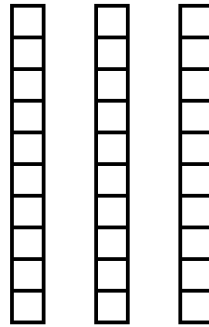
\_\_\_\_\_



\_\_\_\_\_



\_\_\_\_\_



\_\_\_\_\_

Thursday

Figure out which word belongs in each set of boxes and write it correctly in the boxes.

Word list

Hanukkah

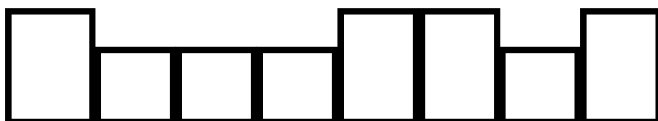
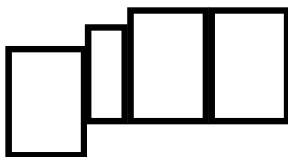
gift

Christmas

tree

ornament

candle



Monday

Read a book with your parents.  
Draw what happened first, in the middle and last in the story.

first	middle	last

Tuesday

Look at each numeral.  
Draw a set that is more than, less than or equal to each

more than 14	less than 11	equal to 21

Wednesday

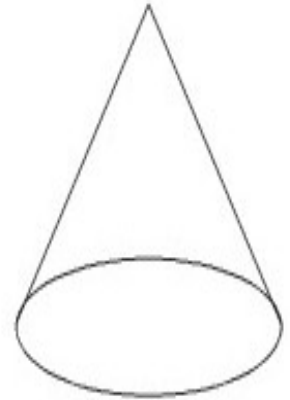
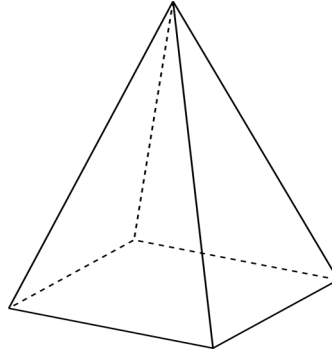
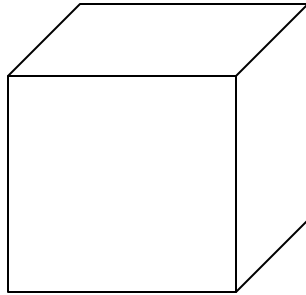
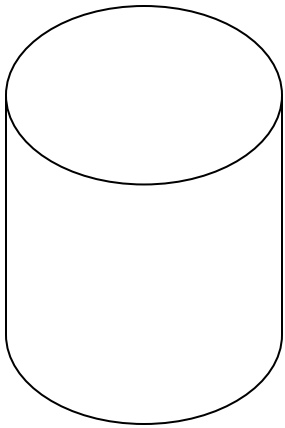
Color the face of each 3D solid shape.  
Write the shape of the face of each solid shape.

faces word bank

circle

triangle

square



\_\_\_\_\_

Thursday

Opinion writing: What is your favorite holiday and why?  
Write a sentence or two explaining your opinion.



\_\_\_\_\_

-----

\_\_\_\_\_

\_\_\_\_\_

-----

\_\_\_\_\_

\_\_\_\_\_

-----

\_\_\_\_\_

Monday

Circle the mistakes in each sentence.  
For a challenge, correct the

i love christmas

her family celebrates Hanukkah

i see a snowflake

did you see santa claus

kwanzaa is a lot of fun



---

Tuesday

Draw and label 1 need and 1 want.

I need...

I want...

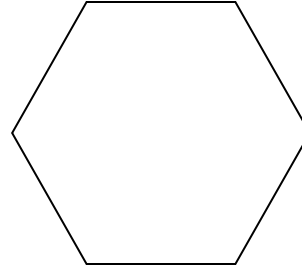



---

---


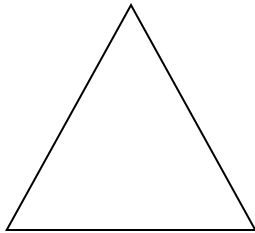
Wednesday

List how many sides and corners each 2D flat shape has. Color the two shapes that have the same number of sides & corners.



\_\_\_ sides    \_\_\_ corners

\_\_\_ sides    \_\_\_ corners



\_\_\_ sides    \_\_\_ corners

\_\_\_ sides    \_\_\_ corners

Thursday

Figure out which word belongs in each set of boxes and write it correctly in the boxes.

Word list

star    Santa    cookies    dreidel    snowflake    stocking

